

Revision Worksheet: 1

Date: 29/6/21

Subject Mathematics

Class 2

Teacher: Kalpana Bawa

Q1: Write the following numbers in expanded form:

155 _____

668 _____

223 _____

217 _____

809 _____

887 _____

765 _____

990 _____

342 _____

178 _____

Q2 Write the following numbers in standard (short) form :

$500 + 50 + 1$ _____

$100 + 50 + 9$ _____

$300 + 90 + 8$ _____

$400 + 20 + 8$ _____

$200 + 30 + 3$ _____

$600 + 60$ _____

$400 + 40 + 8$ _____

$900 + 9$ _____

Q3 Write the numbers that come before and after each number:

198		
-----	--	--

		227
--	--	-----

		469
--	--	-----

	556	
--	-----	--

	235	
--	-----	--

	349	
--	-----	--

		902
--	--	-----

		454
--	--	-----

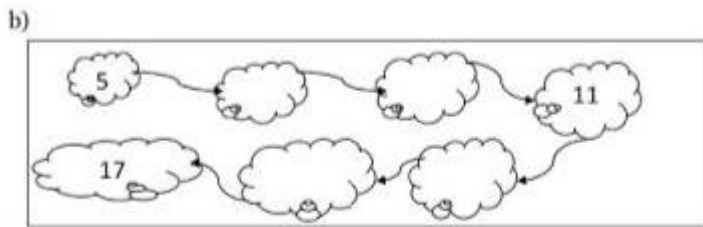
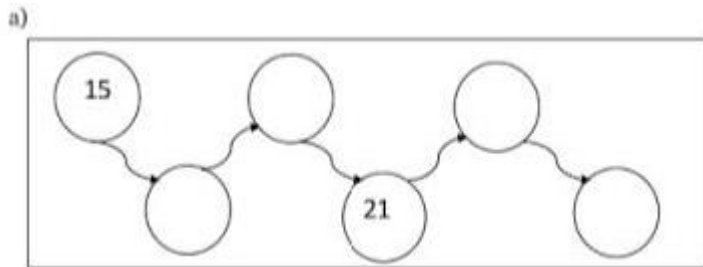
		702
--	--	-----

	589	
--	-----	--

100		
-----	--	--

		180
--	--	-----

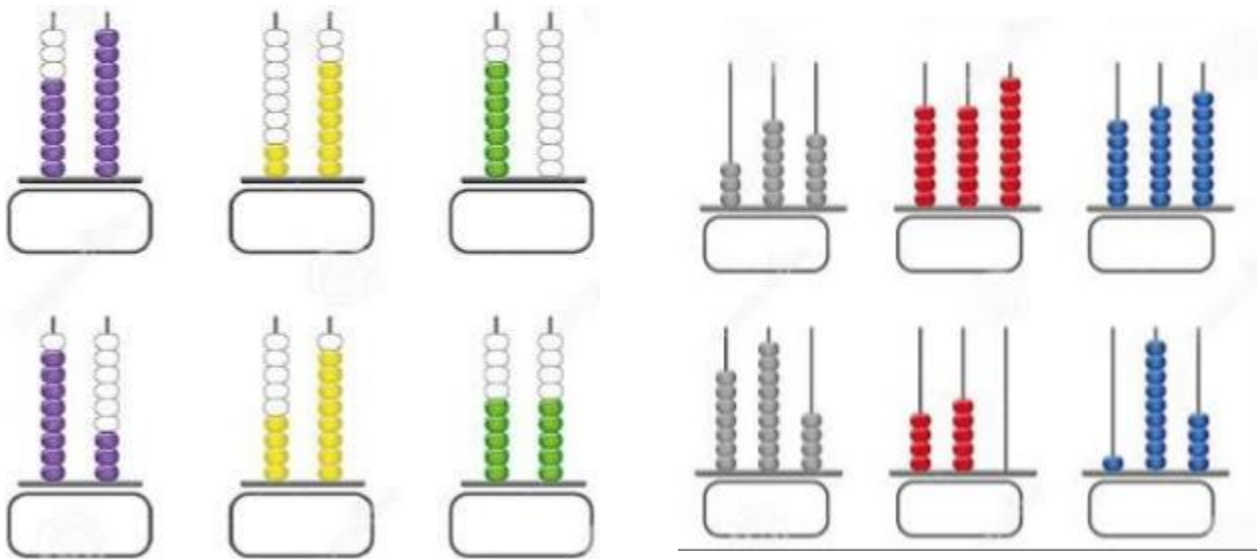
Q4: Write Odd numbers:



Q5: Circle the even numbers. Cross out the odd numbers:

- 57 38 84 23 90 66
12 46 65 87 43

Q6: Write the numbers shown on the abacus :



Q: 7: Write the place value of the coloured digits :

a) 4 0 4 _____

b) 3 5 7 _____

c) 2 7 6 _____

d) 5 6 0 _____

e) 8 5 4 _____

Q8: Write number names :

1) 130 _____

2) 113 _____

3) 150 _____

4) 80 _____

5) 11 _____

Q9: Put the sign $<$, $>$, $=$

1) 123 _____ 132

2) 485 _____ 450

3) 607 _____ 676

4) 342 _____ 243

5) 136 _____ $130+6$

6) $100 +6$ _____ 190

Q10 : Write the even numbers that come between

1) 20 , _____ , _____ , _____ , 28 .

2) 46 , _____ , _____ , _____ , 54 .

3) 74 , _____ , _____ , _____ , 82 .

4) 18 , _____ , _____ , _____ , 26 .

5) 30 , _____ , _____ , _____ , 38 .

